

# What Time Is It? It's on the hour!

Instructions: Write in the times underneath. Try digital times (08:00 or 20:00) or written ones ('eight o'clock')



# What Time Is It? [It's half past the hour!](#)

Instructions: Write in the times underneath. Try digital times (08:30 or 20:30) or written ones ('eight thirty' or 'half-past eight')



# What Time Is It? It's a quarter past the hour!

Instructions: Write in the times underneath. Try digital times (08:15 or 20:15) or written ones ('eight fifteen' or 'a quarter past eight')



# What Time Is It? It's a quarter to the hour!

Instructions: Write in the times underneath. Try digital times (08:45 or 20:45) or written ones ('eight forty-five' or 'a quarter to nine')



# What Time Is It? I'm using 5 minute increments!


Instructions: Write in the times underneath. Try digital times (08:50 or 20:25) or written ones ('eight thirty-five' or 'five minutes to nine')




# ANSWERS (courtesy of my hard-working students):

What Time Is It? It's on the hour!


Instructions: Write in the times underneath. Try digital times (08:00 or 20:00) or written ones ('eight o'clock')



six o'clock    ten o'clock    nine o'clock



three o'clock    twelve o'clock    seven o'clock




eleven o'clock    four o'clock    five o'clock


MRS BC'S TUTOR ROOM

What Time Is It? It's half past the hour!


Instructions: Write in the times underneath. Try digital times (08:30 or 20:30) or written ones ('eight thirty' or 'half-past eight')



half past nine    half past three    half past seven



half past five    half past one    half past twelve




half past ten    half past eleven    half past eight


MRS BC'S TUTOR ROOM

What Time Is It? It's a quarter past the hour!


Instructions: Write in the times underneath. Try digital times (08:15 or 20:15) or written ones ('eight fifteen' or 'a quarter past eight')



quarter past twelve    quarter past nine    quarter past ten



quarter past eleven    quarter past five    quarter past one




quarter past two    quarter past three    quarter past four


MRS BC'S TUTOR ROOM

What Time Is It? It's a quarter to the hour!


Instructions: Write in the times underneath. Try digital times (08:45 or 20:45) or written ones ('eight forty-five' or 'a quarter to nine')



quarter to ten    quarter to six    quarter to five



quarter to eleven    quarter to twelve    quarter to one



quarter to two    quarter to seven    quarter to eight

MRS BC'S TUTOR ROOM

What Time Is It? I'm using 5 minute increments!

Instructions: Write in the times underneath. Try digital times (08:50 or 20:25) or written ones ('eight thirty-five' or 'five minutes to nine')



twenty five mins past eight



quarter to five



ten mins to one



five mins to eleven



five mins to six



five mins to three



twenty mins to four



quarter past seven



six o' clock

MRS BC'S  
TUTOR ROOM

MRS BC'S  
TUTOR ROOM